

Summer Social Studies Study

The fifth grade summer social studies course of study has a couple of requirements.

First, spend time learning the fifty states, their respective capitals, and the spelling of each. You will be tested on these items shortly after the school year begins.

Secondly, you are asked to acquaint yourself with some of the important sites that we will be learning about as we study U.S. geography and American history in the coming year. Included in this packet is a table/chart that will require you to do a little research to determine where various sites are located in America. Read the instructions above the chart then use an atlas or other research tool to complete the assignment. Hopefully you will also learn a little of the site's importance or significance. You will be tested in September on the information you discover and record on the attached table. Therefore, after you have completed the chart and maps don't forget to review your work periodically before the school year begins. A strong effort on your part over the summer will help you to not only learn about our country but will also ease your academic responsibility throughout the year.

If you have any questions as to this assignment please contact Mr. Cash at 512-899-1001 or by email at bob@paragonprep.com.

Name: _____

Summer U.S. Geography Assignment

Complete this chart by filling in the state where each site, city, etc. can be found. After completing the chart for each region, locate the site, city, etc. on the appropriate regional map by placing a dot, circle, or arrow to indicate the proper location. Then neatly write the name of the site, city, etc. You don't need to write the state name on the map. When the chart and all regional maps are complete locate all items on the U.S. map with a dot/arrow and the appropriate number. Note: some items may be located in more than one state.

STATE

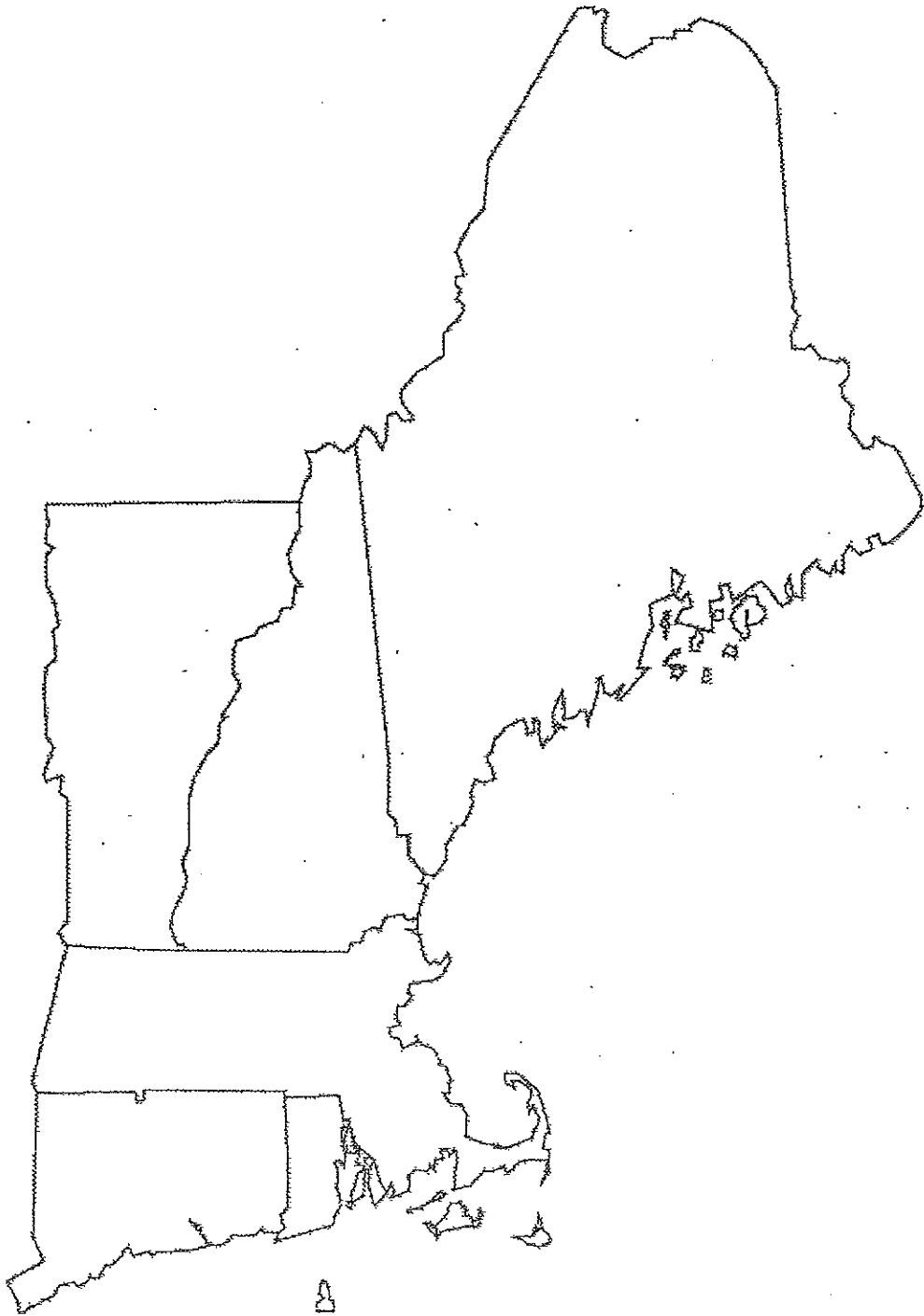
New England Region		
1	Acadia National Park	
2	Lexington and Concord	
3	Mt. Washington	
4	Narragansett Bay	
5	Plymouth	
6	Woods Hole	
Mid-Atlantic Region		
7	Atlantic City	
8	Baltimore	
9	du Pont Chemicals	
10	Finger Lakes	
11	Ft. McHenry	
12	Ft. Ticonderoga	
13	Gettysburg	
14	Niagara Falls	
15	Philadelphia	
16	U.S. Naval Academy	

Southeast Region		
17	Cowpens	
18	Cumberland Gap (3 states)	
19	Ft. Boonesborough	
20	Harpers Ferry	
21	James River	
22	Kings Mountain Battlefield	
23	Lake Okeechobee	
24	Lake Pontchartrain	
25	Manassas	
26	Natchez Trace (3 states)	
27	Oakridge (Atomic City)	
28	Okefenokee Swamp	
29	Outer Banks	
30	Stone Mountain	
31	Tampa	
32	The Everglades	
33	Tuscaloosa	
34	Vicksburg	
35	Williamsburg	
Great Lakes Region		
36	Cahokia Mounds	
37	Cincinnati	
38	Cleveland	
39	Lincoln's New Salem	
40	Milwaukee	
41	Sault Sainte Marie	
42	Serpent Mound	
43	South Bend	
44	Toledo	
45	Upper Peninsula	

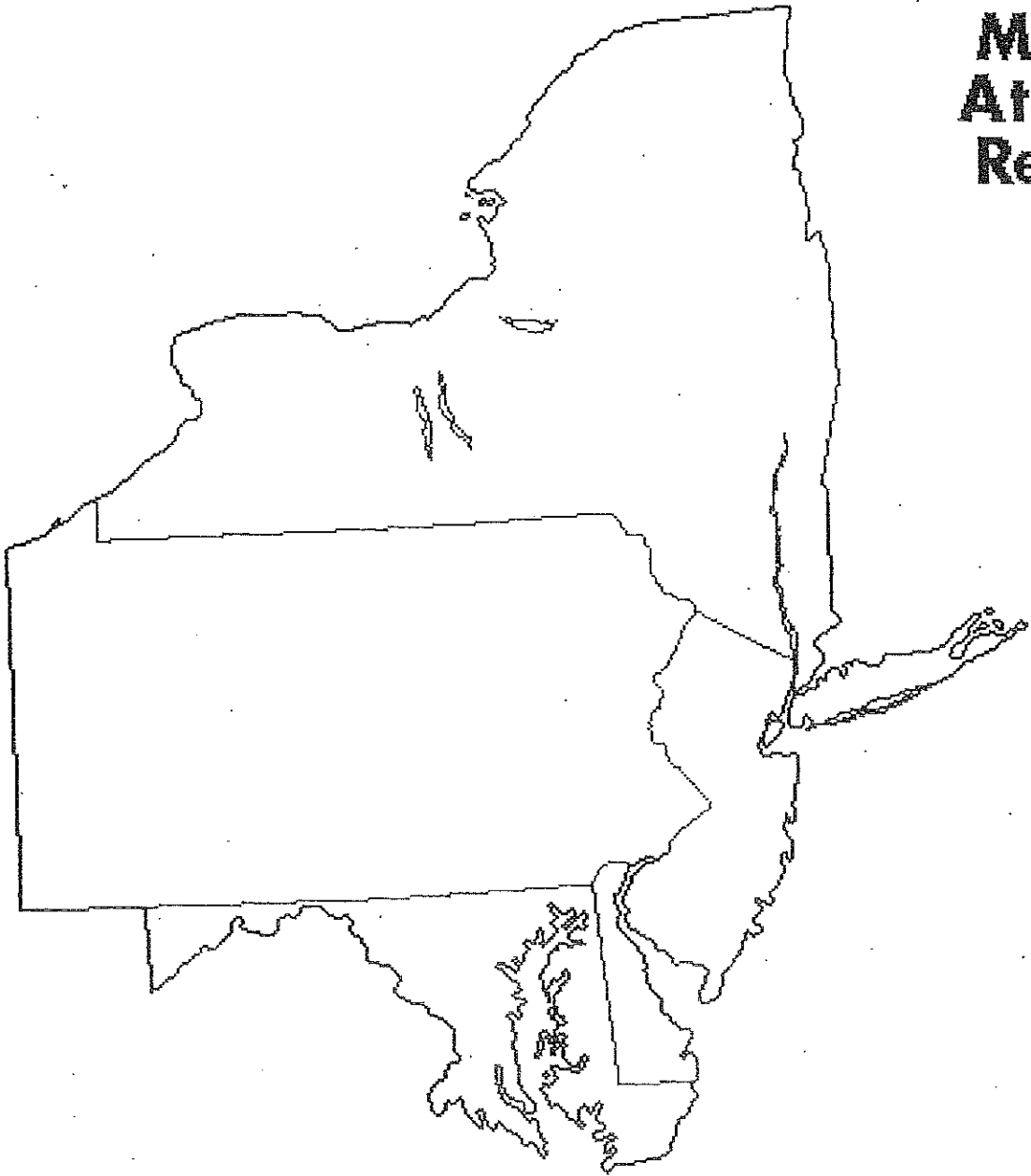
Great Plains Region		
46	Badlands National Park	
47	Chimney Rock	
48	Dodge City	
49	Gateway Arch	
50	Mt. Rushmore	
51	Sioux City	
Southwest Region		
52	1834-Indian Territory (Hint: just north of Texas)	
53	Big Bend National Park	
54	Carlsbad Caverns	
55	Galveston	
56	Grand Canyon	
57	Los Alamos	
58	Lubbock	
59	Monument Valley (2 states)	
60	Tahlequah	
61	Tucson	
Mountain Region		
62	Arches National Park	
63	Aspen	
64	Bitterroots	
65	Bryce Canyon National Park	
66	Devils Tower	
67	Glacier National Park	
68	Great Salt Lake	
69	Hells Canyon (2 states)	
70	Hoover Dam (2 states)	

71	Las Vegas	
72	Nez Perce Indian Reservation	
73	Pikes Peak	
74	Promontory	
75	Rocky Mountain National Park	
76	Snake River Plain	
77	Steamboat Springs	
78	Telluride	
79	Yellowstone National Park	
80	Zion National Park	
Pacific Region		
81	Aleutian Islands	
82	Crater Lake	
83	Death Valley Natl Park (2 states)	
84	Ft. Clatsop	
85	Golden Gate Bridge	
86	Grand Coulee Dam	
87	Mt. Hood	
88	Mt. Kilauea	
89	Mt. McKinley/Denali	
90	Mt. Rainier	
91	Oakland	
92	Puget Sound	
93	San Diego	
94	San Francisco	
95	San Jose	
96	Seattle	
97	Sierra Nevadas (2 states)	
98	Willamette Valley	
99	Yosemite National Park	
100	Yukon River	

New England
States

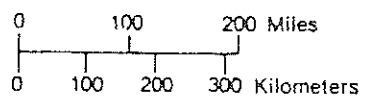


**Middle
Atlantic
Region**



NAME _____


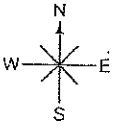
THE SOUTHEAST



HBJ material copyrighted under notice appearing earlier in this work

NAME _____

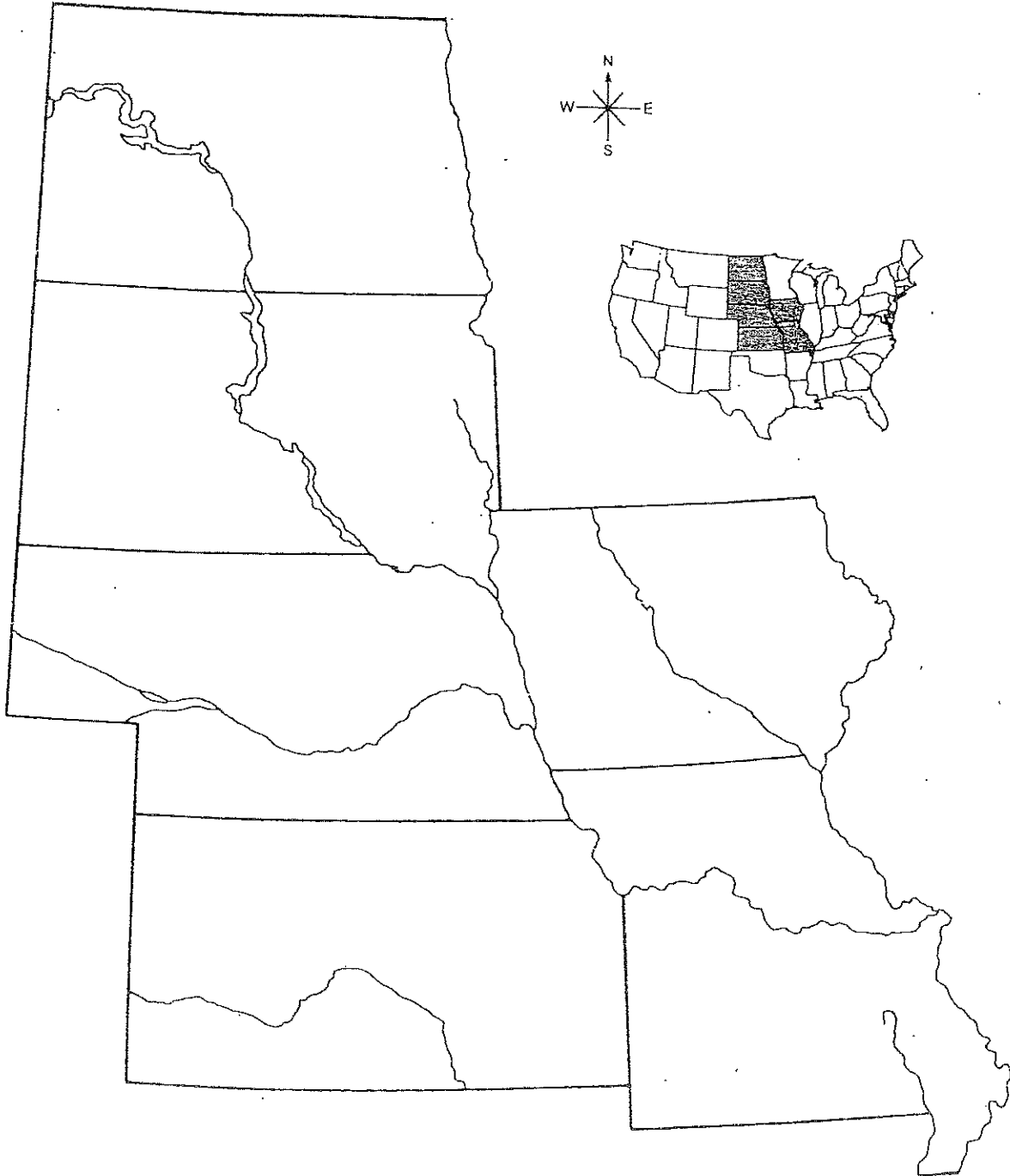
THE GREAT LAKES STATES



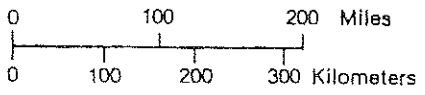
HBJ material copyrighted under notice appearing earlier in this work.

NAME _____

THE PLAINS STATES

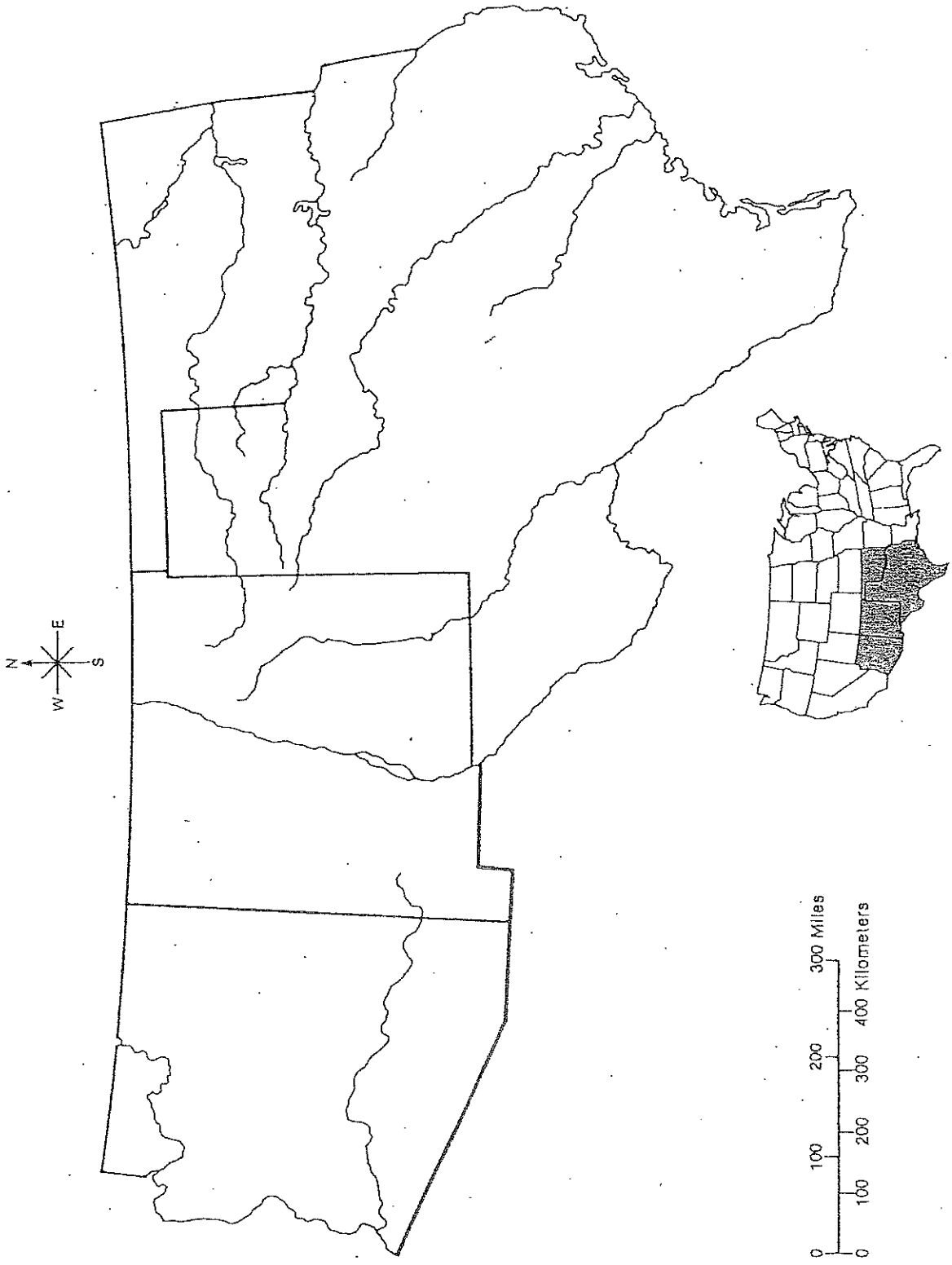


HBJ material copyrighted under notice appearing earlier in this work.



NAME _____

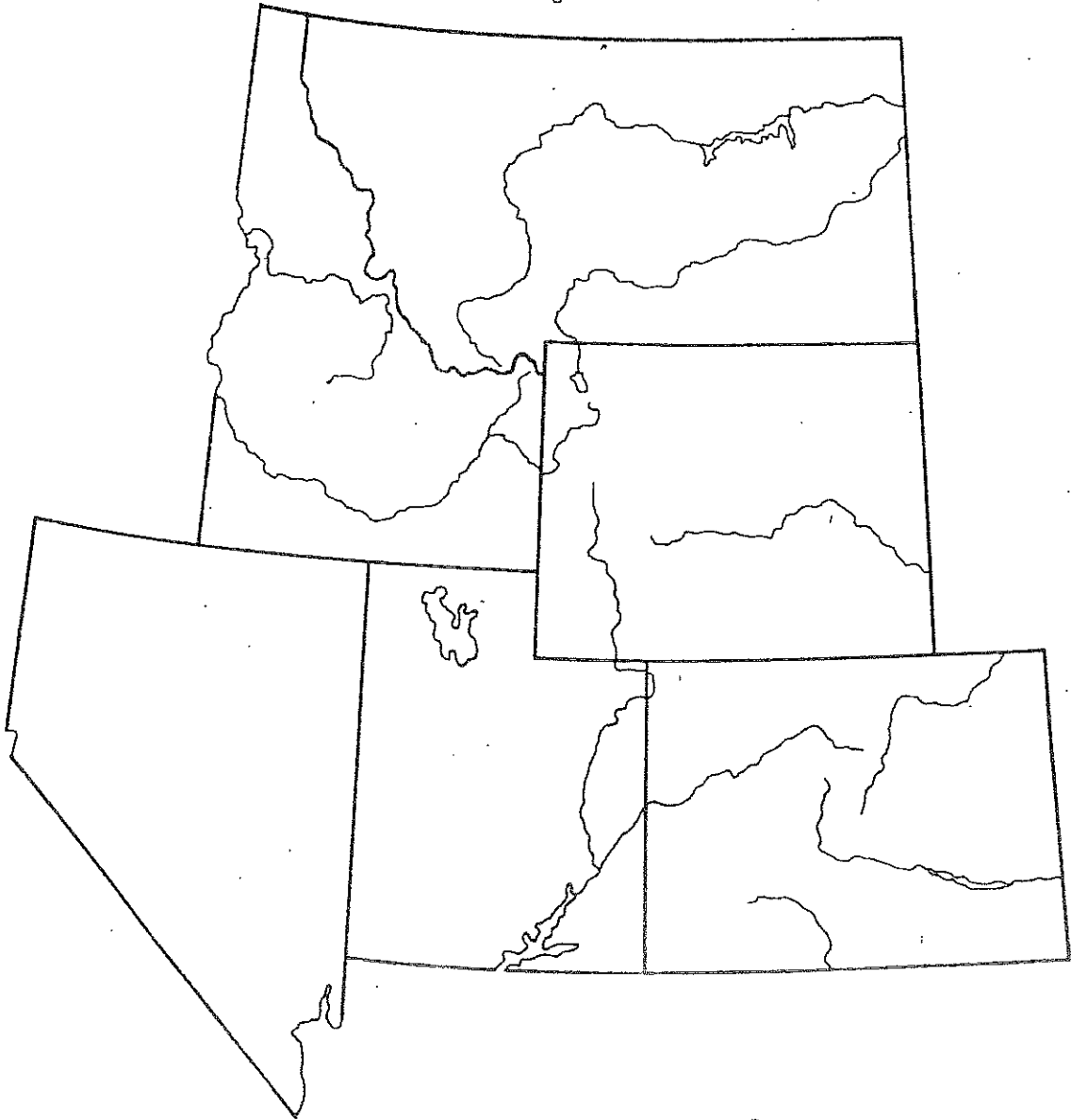
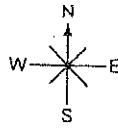
THE SOUTHWEST



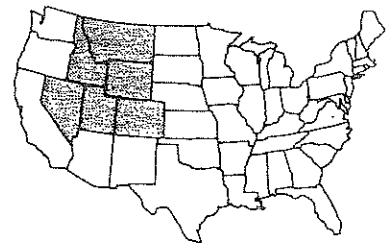
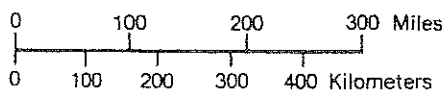
HBJ material copyrighted under notice appearing earlier in this work.

NAME _____

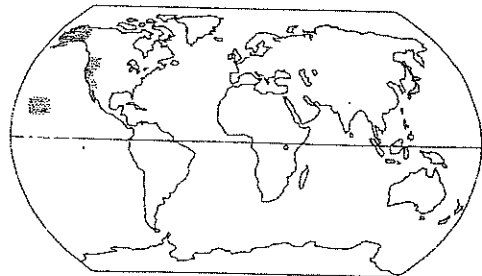
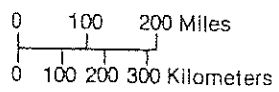
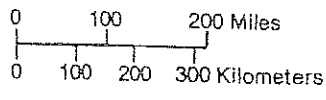
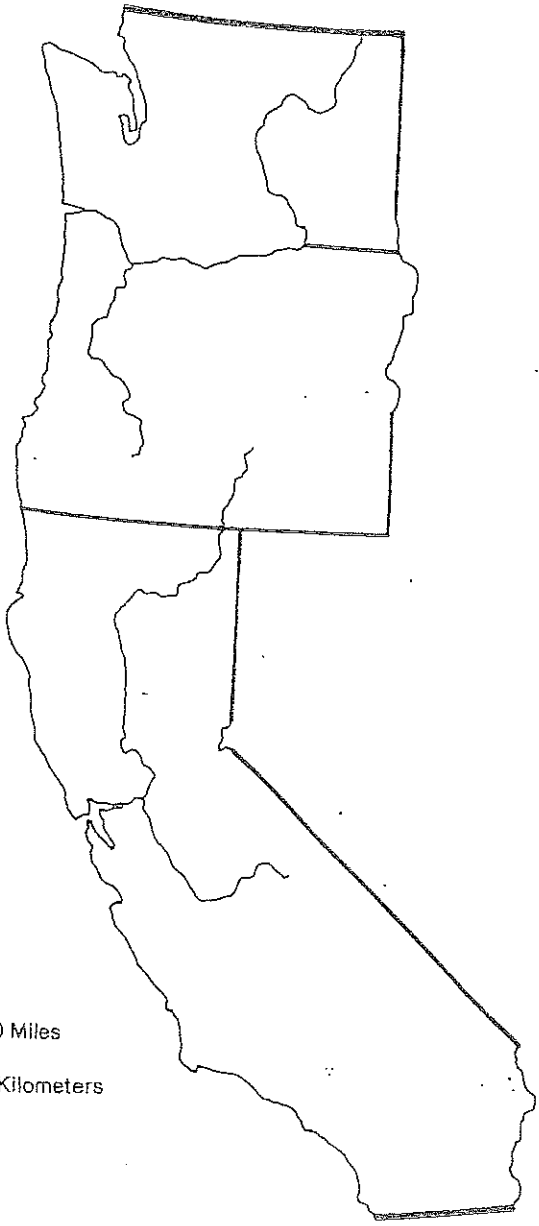
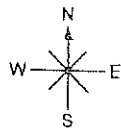
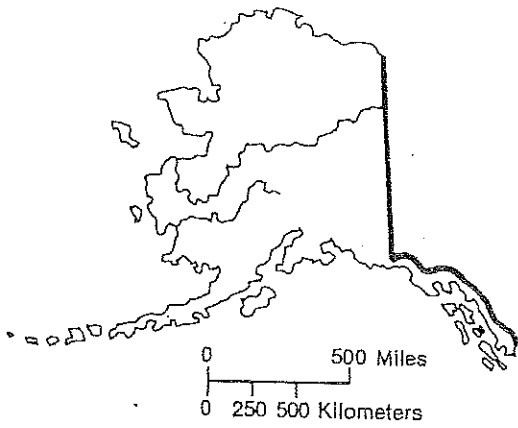
THE MOUNTAIN STATES



HBJ material copyrighted under notice appearing earlier in this work.



THE PACIFIC STATES



HBJ material copyrighted under notice appearing earlier in this work.

